


Ellie has 4 apples. Jessica brings 7 more. How many do they have in all?



Hannah had 18 candy bars. Krispen ate 7 of them. How many does Hannah have left?



Lindsay had 11 purple balloons and 9 green balloons, how many does she have all together?




Kaki had 17 pumpkins she carved 4 of them. How many does she have left to carve?



Addition equation

$8+5=$




Subtraction Equation


$20-12=$



Subtraction equation

$18-6=$





ELLIE HAS 4 APPLES.

JESSICA BRINGS 7 MORE.

HOW MANY DO THEY HAVE IN ALL?



**HANNAH HAD 18 CANDY BARS.
KRISPEN ATE 7 OF THEM.
HOW MANY DOES HANNAH HAVE LEFT?**



**LINDSAY HAD 11 PURPLE BALLOONS
AND 9 GREEN BALLOONS,
HOW MANY DOES SHE HAVE ALL TOGETHER?**




KAKI HAD 17 PUMPKINS

SHE CARVED 4 OF THEM.

HOW MANY DOES SHE HAVE LEFT TO CARVE?

$$8 + 5 = \underline{\quad}$$



20-12=



$$18 - 6 = \underline{\quad}$$

