

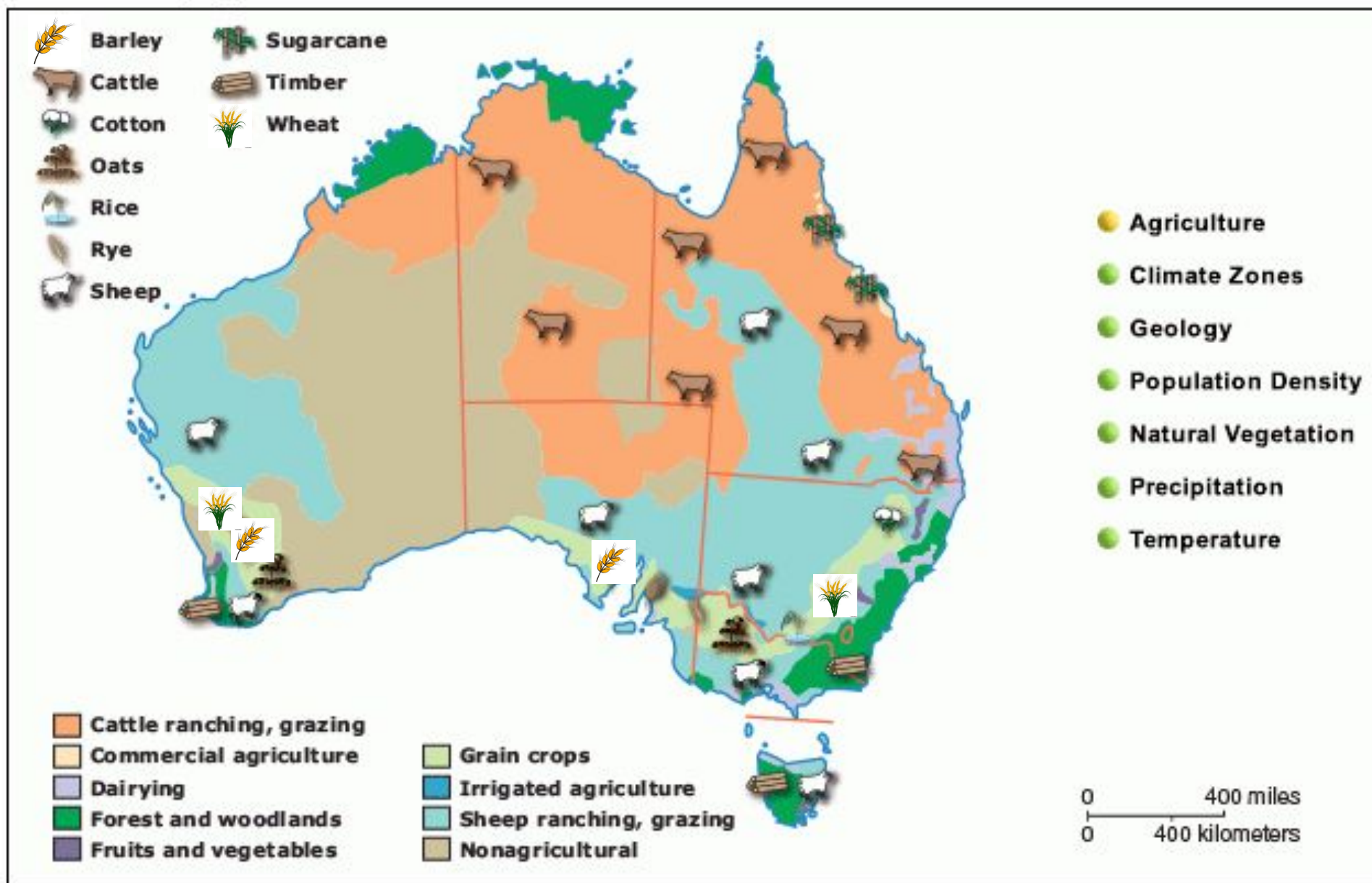
Think Along Plan - 6th SS

Explore It



Explore It

Australia, agriculture



Explore It - Learning Loops




What do you notice in the maps?

My Thoughts	Partner 1's Thoughts	Partner 2's Thoughts
Summary:		

Talk About It - Fact or Fib Showdown

Agriculture

Directions: Read the statements and determine if they are true (fact) or false (fib). Then click and drag the green check marks into the correct column.

	Fact	Fib	Statement
			Agriculture (farming) requires a water source.
			Crops can't grow in areas with little to no rainfall.
			Farms are often started near rivers because of the possibility of more fertile land (soil that is good for growing crops.)

Defend It



Defend It

Ben moved to Australia from the United States where he was a soybean and corn farmer in Iowa. He wants to continue growing crops. Where would he **MOST LIKELY** choose to farm?

- A. South Australia
- B. Western Australia
- C. New South Wales
- D. Tasmania

Defend It

Round 1 Worst Answer

Ben moved to Australia from the United States where he was a soybean and corn farmer in Iowa. He wants to continue growing crops. Where would he **MOST LIKELY** choose to farm?

- A. South Australia
- B. Western Australia
- C. New South Wales
- D. Tasmania

Defend It

Round 2 Best Distractor

Ben moved to Australia from the United States where he was a soybean and corn farmer in Iowa. He wants to continue growing crops. Where would he **MOST LIKELY** choose to farm?

- A. South Australia
- B. Western Australia
- C. New South Wales
- D. Tasmania

Defend It

Round 3 Correct Answer

Ben moved to Australia from the United States where he was a soybean and corn farmer in Iowa. He wants to continue growing crops. Where would he **MOST LIKELY** choose to farm?

- A. South Australia
- B. Western Australia
- C. New South Wales
- D. Tasmania

Change It



- What economic activities are represented on this map?
- Where are they located?
- What do you know about freshwater and saltwater?

Change It - Odd One Out

1



2



3



4



Box number _____ doesn't belong
because ...

Reflect On It - 3-2-1

Summary

3 Things I Learned	<ul style="list-style-type: none">•••
2 Examples, Applications, or Inferences About What I Learned	<ul style="list-style-type: none">••
1 Question or Draw 1 Conclusion About What I Learned	<ul style="list-style-type: none">•