

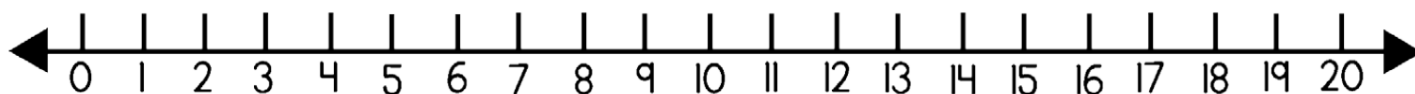
Name \_\_\_\_\_ Date \_\_\_\_\_

Standard NR 2.2 CFA


I can use a strategy (number line or counting on) to add.



1.  $3 + 9 = \underline{\quad\quad}$



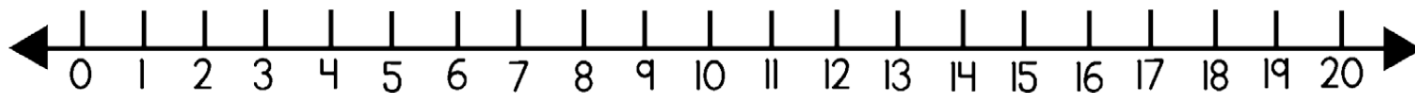
1.  $3 + 9 = \underline{\quad\quad}$




\_\_\_\_\_



2.  $11 + 5 = \underline{\quad\quad}$

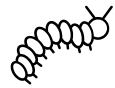


2.  $11 + 5 = \underline{\quad\quad}$

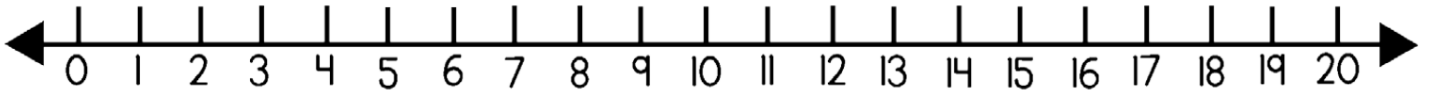


\_\_\_\_\_

I can use a strategy (number line or counting back) to subtract.



3.  $12 - 4 = \underline{\quad\quad}$



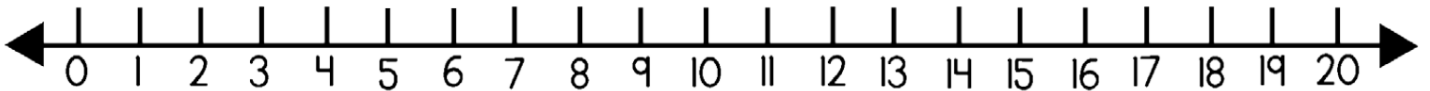
3.  $12 - 4 = \underline{\quad\quad}$





4.  $18 - 5 = \underline{\quad\quad}$



4.  $18 - 5 = \underline{\quad\quad}$

